

Cameron has 10 pennies. He puts 4 in the candy machine. How many pennies does Cameron have now? Draw a picture to show your answer. Write a number sentence!

10

___ / ___ / ___



___ - ___ = ___

___ pennies

Cash has 8 baseball cards. He gives 2 to David. How many baseball cards does Cash have left? Draw a picture to show your answer. Write a number sentence!

8

___ / ___ / ___



___ - ___ = ___

___ cards

Carrie has 3 teddy bears. She gives 1 to Mila. How many teddy bears does Carrie have now? Draw a picture to show your answer. Write a number sentence!

3S

___ / ___ / ___



___ - ___ = ___

___ bears

Luca has 9 gems. She buries some in the sand. Now, she has 4 gems. How many gems did Luca bury? Draw a picture to show your answer. Write a number sentence!

4S

___ / ___ / ___



___ - ___ = ___

___ gems

Jamie is at the movies. She has 8 pieces of popcorn. Silas eats some. Jamie has 4 pieces left. How many pieces did Silas eat? Draw a picture to show your answer. Write a number sentence!

5S

___ / ___ / ___



___ - ___ = ___

___ pieces

Jaden has some kiwis. He eats 6, then there are 2 left. How many kiwis did Jaden have to begin? Draw a picture to show your answer. Write a number sentence!

6S

___ / ___ / ___



___ - ___ = ___

___ kiwis

Jimmy has a sleepover with friends. 4 of them fall asleep. 3 are still awake. How many kids are there in all? Draw a picture to show your answer. Write a number sentence!

7S

___ / ___ / ___



___ - ___ = ___

___ kids

Frankie can hang upside down for 10 seconds. Malia can hang for 7 seconds. How many more seconds can Frankie hang than Malia? Draw a picture to show your answer. Write a number sentence!

8S

___ / ___ / ___



___ - ___ = ___

___ more seconds

Beau brings cupcakes to school for his birthday. Kim eats 3 and Pete eats 5. How many more cupcakes did Pete eat than Kim? Draw a picture to show your answer. Write a number sentence!

95

___ / ___ / ___



___ - ___ = ___

___ cupcakes

Lilly hits 8 tennis balls with her racket. Eddie hits 5 balls. How many fewer balls did Eddie hit than Lilly? Draw a picture to show your answer. Write a number sentence!

105

___ / ___ / ___



___ - ___ = ___

___ fewer balls

Carly has 5 more yo-yo's than Asa. Asa has 4 yo-yo's. How many yo-yo's does Carly have? Draw a picture to show your answer. Write a number sentence!

11S

___ / ___ / ___



___ - ___ = ___

___ yo-yo's

Colin has 7 fewer muffins than Bret. Bret has 11 muffins. How many muffins does Colin have? Draw a picture to show your answer. Write a number sentence!

12S

___ / ___ / ___



___ - ___ = ___

___ muffins

Callie has 2 more marshmallows than Julia. Callie has 5 marshmallows. How many marshmallows does Julia have? Draw a picture to show your answer.

Write a number sentence!

13S

___ / ___ / ___



___ - ___ = ___

___ marshmallows

Aadhya has 3 fewer books than Callum. Aadhya has 9 books. How many books does Callum have? Draw a picture to show your answer. Write a number sentence!

14S

___ / ___ / ___



___ - ___ = ___

___ books

There are 14 bugs in all. 5 are on the rock. The rest are in the log. How many bugs are in the log? Draw a picture and write a number sentence to show your answer.

15S

___ / ___ / ___



___ - ___ = ___

___ bugs

Jason has 9 gumballs. He gives some to Samira. Now, Jason has 2 gumballs. How many did he give to Samira? Count back from 9 until you reach 2 to find your answer.

16S

___ / ___ / ___

9...

___, ___, ___

___, ___, ___

___,

He gave away ___ gumballs.

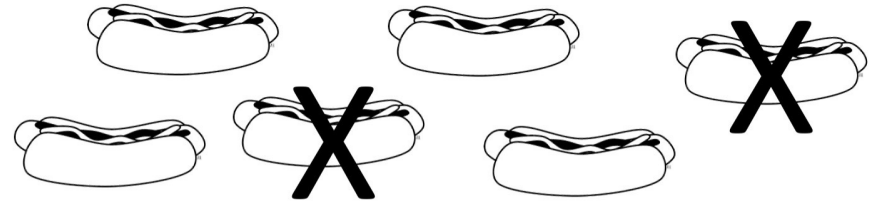
Draw a picture that shows
 $15 - 6 = 9$.

17S

___ / ___ / ___

$15 - 6 = 9$

What subtraction sentence does this
picture show? How do you know?



18S

___ / ___ / ___

It shows ___ - ___ = ___

I know this because

Write the sentence below. Then,
write the number sentence it
describes.

2 less than 3 is _____

19S _____ / _____ / _____

2 less than 3 is _____

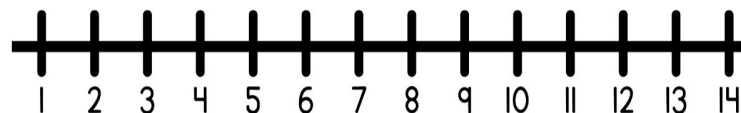
_____ - _____ = _____

Amari was using a number line to solve a
math problem. He started at 12 and
stopped at 7. Write a number sentence to
show what problem Amari was solving.

Draw to explain.

20S _____ / _____ / _____

_____ - _____ = _____

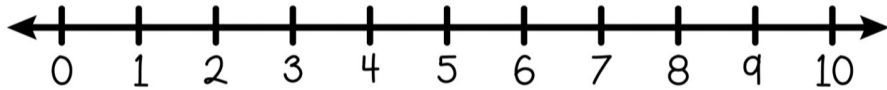


Use the number line to solve

$7 - 4 = \underline{\quad}$

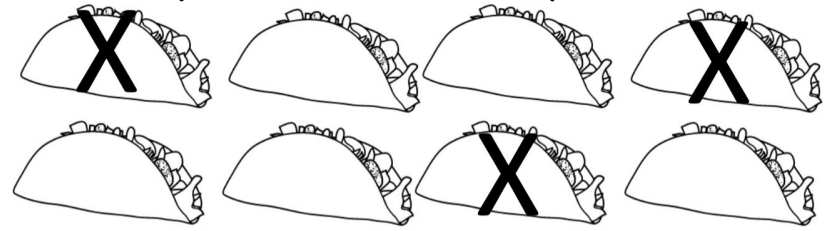
Write about how you used the number line to solve, and use your pencil to show how you count up on the number line to solve.

215



I used the number line to solve
by _____

What subtraction sentence is shown in this picture? How do you know?



22S


I know this because

Write a subtraction sentence whose answer is 6. Draw a picture to go along with it.

23S

___ / ___ / ___

$$\underline{\quad} - \underline{\quad} = 6$$




Write a subtraction sentence whose answer is 10. Draw a picture to go along with it.

24S

___ / ___ / ___

$$\underline{\quad} - \underline{\quad} = 10$$



Write one subtraction sentence that is true. Write one that is false.
~~Cross out the false sentence.~~

25S / /

True:

 - =

False

 - =

Write the number sentences below.
~~Cross out the ones that are false.~~
Circle the ones that are true.

26S / /

$$10 - 2 = 8$$

$$6 - 4 = 12$$

$$10 - 5 = 5$$


$$8 - 6 = 3$$

Fill in the missing number to make this number sentence true. Draw a picture to check your answer.

27S

___ / ___ / ___

$$8 - \underline{\quad} = 6$$



Fill in the missing number to make this number sentence false. Draw a picture to check your answer.

28S

___ / ___ / ___

$$12 - \underline{\quad} = 5$$



Fill in a fact for each difference.

29s ___ / ___ / ___

$$\underline{\quad} - \underline{\quad} = 5$$

$$\underline{\quad} - \underline{\quad} = 3$$

$$\underline{\quad} - \underline{\quad} = 6$$

Write the missing number that makes the equation true.

30s ___ / ___ / ___

$$8 - 2 = 10 - \underline{\quad}$$

Do you agree or disagree with this statement? Why? Draw and write to explain.

9-2 is the same as 2-9.

31S _____ / _____ / _____

I agree/disagree because

Do you agree or disagree with this statement? Why? Draw to show your proof.

Knowing my addition facts can help me subtract.

32S _____ / _____ / _____

I agree/disagree because
